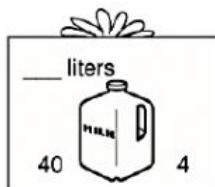

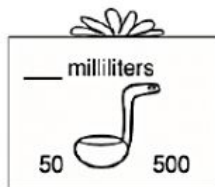
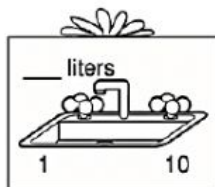
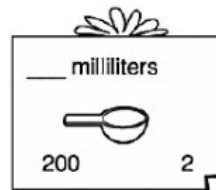



Capacity – Find whether you will use L or ml to measure the liquids.



Bonus Box: Why would a scientist measure in milliliters instead of liters? Write your reasons on the back of this page.