
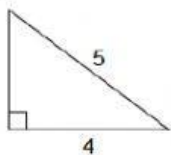




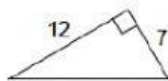
Pythagorean theorem - integers

Calculate the length of the missing side. 

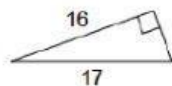
1)



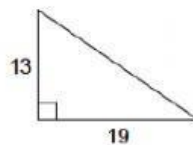
2)



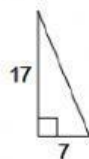
3)



4)



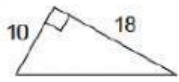
5)



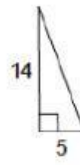
6)



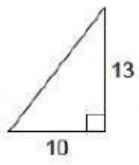
7)



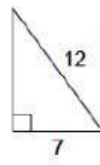
8)



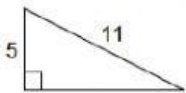
9)



10)



11)



12)

