













Telling the time

Name: _____

What time is it?

1		2		3		4	
a. It's five o'clock b. It's four o'clock		c. It's twelve o'clock d. It's eleven o'clock		a. It's twelve o'clock b. It's six o'clock		a. It's nine o'clock b. It's eight o'clock	
5		6		7		8	
a. It's six o'clock b. It's seven o'clock		a. It's ten o'clock b. It's nine o'clock		a. It's one o'clock b. It's two o'clock		a. It's eight o'clock b. It's nine o'clock	
9		10		11		12	
a. It's three o'clock b. It's two o'clock		a. It's twelve o'clock b. It's one o'clock		a. It's five o'clock b. It's four o'clock		a. It's eleven o'clock b. It's twelve o'clock	