

# 5TH GRADE – MATHS FACTORS AND MULTIPLES

## INTERACTIVE WORKSHEET 04

I. Prime factorise the following numbers using the division method.

1.  $20 =$

5.  $600 =$

2.  $36 =$

6.  $147 =$

3.  $51 =$

7.  $84 =$

4.  $75 =$

II. Prime factorise the following numbers using the factor tree method.

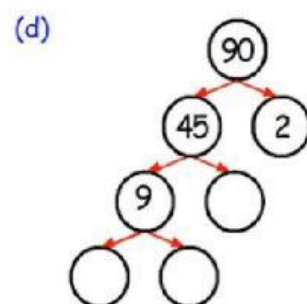
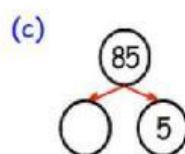
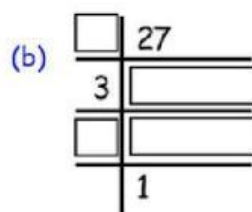
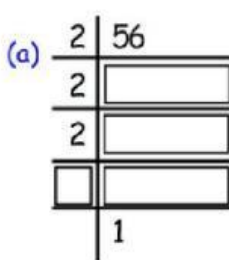
1.  $40 =$

3.  $50 =$

2.  $72 =$

4.  $81 =$

III. Complete the prime factorisations of the following numbers.



# GALAXY

# ESCHOOL

