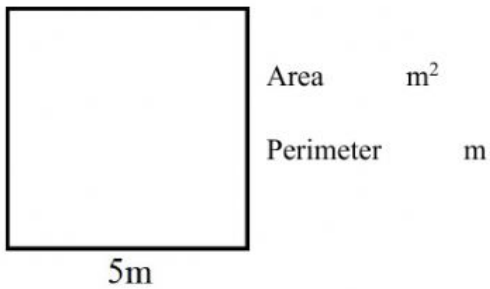



## Area and Perimeter

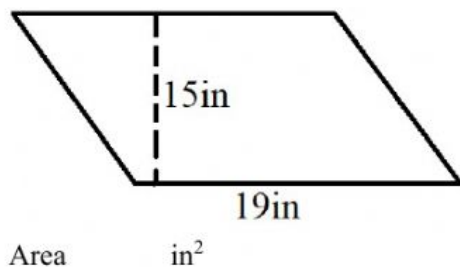
1) Calculate the Area and Perimeter



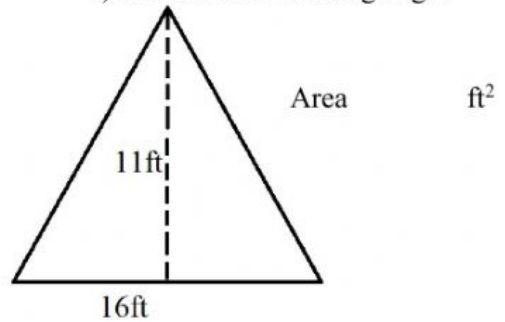
2) Calculate Area and Perimeter



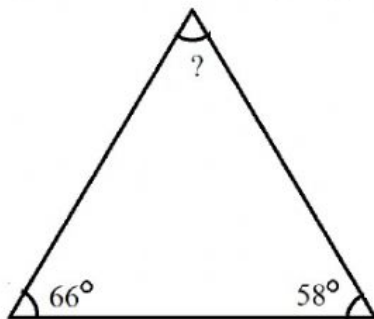
3) Calculate the Area



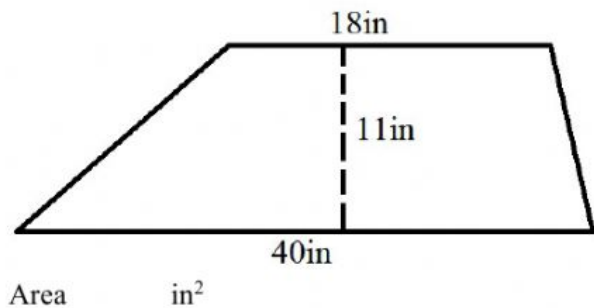
4) Calculate the missing angle



5) Calculate the missing angle



6) Calculate the Area



7) What is the area of a square whose side is equal to 7 yds?  $\text{yd}^2$

8) What is the perimeter of a rectangle with a length of 10.2 m and length of 12.8m?  $\text{m}$

9) What is the area of a parallelogram with a height of 13in and base of 16in?  $\text{in}^2$

10) What is the area of a triangle with a base of 18 ft and height of 13 ft?  $\text{ft}^2$