

1st Junior
MATHS II TERM
GEOMETRY

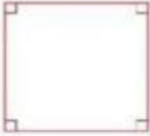

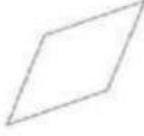
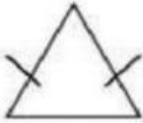
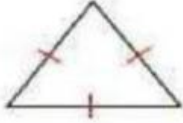



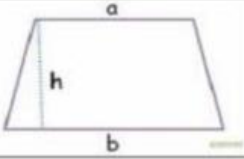
Geometric figures

1. Unscramble the words and translate them.

- a) lllompaaarreg _____
- b) sbohmr _____
- c) ccriel _____
- d) arelcnegt _____
- e) avlo _____
- f) seqaur _____
- g) terliagn _____
- h) turmazipe _____



2. Using the words from the ex.1 name the shapes.

3. Guess the words by their definitions.

- a) _____ - a geometric figure with three sides and three angles.
- b) _____ - a quadrilateral with all four sides equal.
- c) _____ - a round geometric figure.
- d) _____ - a geometric figure that looks like an egg.
- e) _____ - a quadrilateral with opposite sides parallel and equal.
- f) _____ - a quadrilateral with no parallel sides
- g) _____ - a four-sided shape that is made up of two pairs of parallel lines and that has four right angles ; *especially* : a shape in which one pair of lines is longer than the other pair