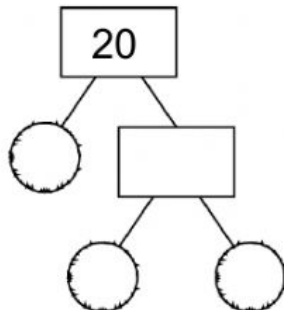


Name :

5th Grade

Find the Prime Factors of the Numbers

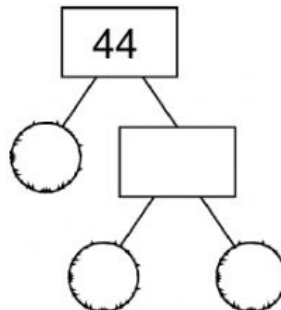
1)



Prime Factors _

$$\times _ \times _ = 20$$

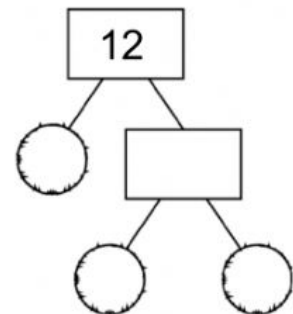
2)



Prime Factors _

$$\times _ \times _ = 44$$

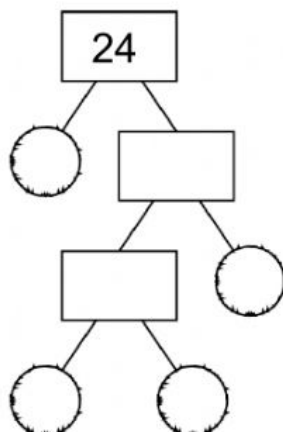
3)



Prime Factors

$$_ \times _ \times _ = 12$$

4)



Prime Factors

$$_ \times _ \times _ \times _ = 24$$

Write the factor of the following numbers from least to greatest:

24:

16:

20:

18:

Write the first 10 multiples of the following numbers:

4:

6:

9:

8:

7:

