

## CHAPTER: 03

## TOPIC: FEVER AND COUGH

### ACTIVITY: 01 Choose the correct answer.

- ✓ Which of the following statements is true about fever?

Decrease in body temperature

Difficulty in breathing

Increase in body temperature

Pain in chest

- ✓ Which of the following practices can transfer germs into the body?

Wearing a mask

Washing hands

Drinking clean water

Eating food from a street vendor





### ACTIVITY: 02 Drag and drop the causes of diseases with the correct picture.

Air pollution

scarcity of food

intake of polluted water

germs



### ACTIVITY: 03 Choose "T" for true and "F" for false statements.

- The human body temperature is measured by a thermometer.
- The normal human body temperature is 37 °F.
- Fever is a disease as well as symptom of a disease.
- It is important to observe the symptoms of a disease to diagnose.

T

/

F

T

/

F

T

/

F

T

/

F