


NAME: \_\_\_\_\_

**TOPIC: MEASURING MASS IN KILOGRAMS**

**(C) REMEMBER AND UNDERSTANDING**




What is the mass of the **3 sacks of rice**?

kg


**(B) APPLICATION**

Refer to the above mass, what is the **total mass of the 2 sacks of rice and 2 melons**?

kg



**(A) ANALYSE**

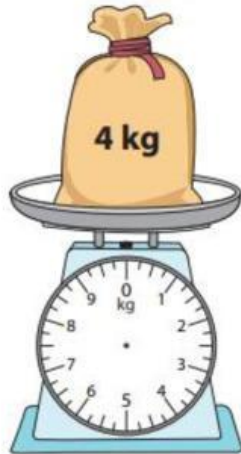


The mass of both bags is 24 kg.

If the smaller bag is 9 kg, what is the mass of the bigger bag?

kg

**(D) EVALUATE**



The total of 5 bags is 20 kg.

Do you agree with this statement?

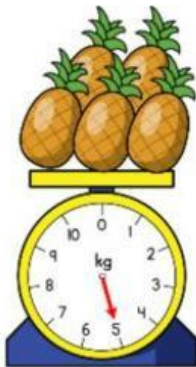
YES / NO

Why?

---

---

**(E) CREATE**



Create 1 or 2 sentence on measuring mass of the object.

---

---