



Student's name: \_\_\_\_\_ Teacher's name: \_\_\_\_\_

Gender: \_\_\_\_\_ Date: \_\_\_\_\_ / \_\_\_\_\_ / \_\_\_\_\_

Class: \_\_\_\_\_ / Grade: 1

## Math Quiz II


### I. Solving word problems:

#### Addition and subtraction.

a) Grandma bakes 20 muffins.  
She gives 8 muffins to Emily.  
How many muffins does Grandma have left?



Grandma has \_\_\_\_\_ muffin left.



b) 20 insects are in the garden.  
12 are bees. The rest are ladybirds.  
How many ladybirds are there?

There are \_\_\_\_\_ ladybirds.

c) Sam has 15 marbles.  
Ali gives him 9 marbles.  
How many marbles does Sam have now?



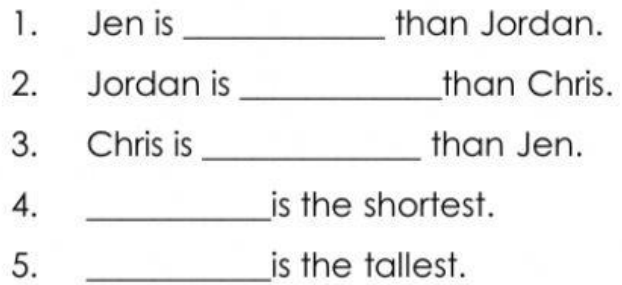
Sam has \_\_\_\_\_ marbles now.



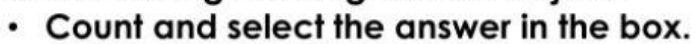
d). Sara has 18 green ribbons and red ribbon altogether.  
12 ribbons are green. How many ribbons are red?

There are \_\_\_\_\_ red ribbons.


➤ Look at the three students below and choose the correct answer.

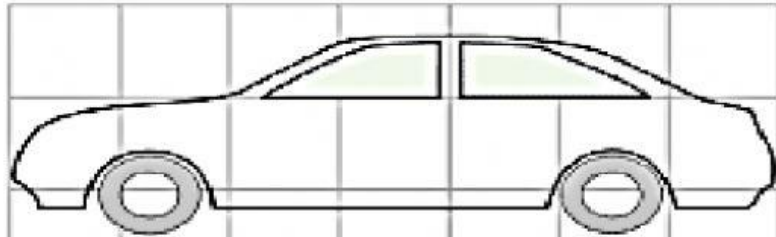


1. The scissors is \_\_\_\_\_ than stapler.
2. The stapler is \_\_\_\_\_ than scissors.
3. Pencil is the \_\_\_\_\_.
4. Eraser is \_\_\_\_\_ than comb.
5. The comb is \_\_\_\_\_ than the




## Measuring length

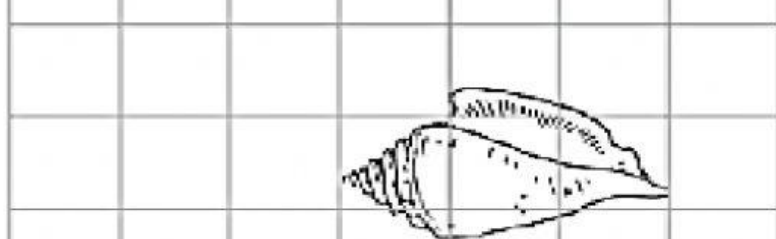
Use  as unit to measure the length of these objects



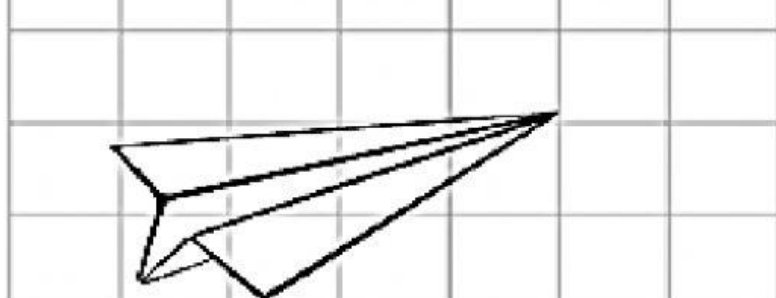
about \_\_\_\_\_  long



about \_\_\_\_\_  long



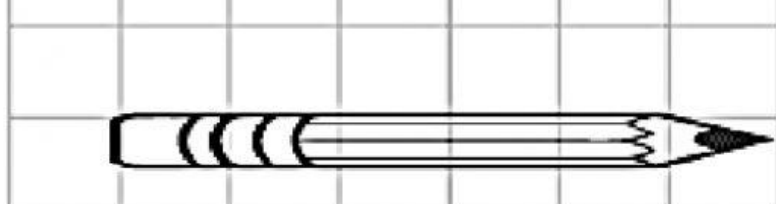
about \_\_\_\_\_  long



about \_\_\_\_\_  long



about \_\_\_\_\_  long



about \_\_\_\_\_  long