

Name:

Roll no:


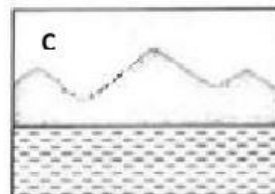
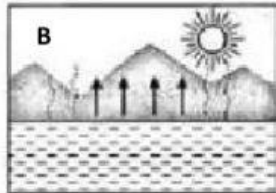

Section:



## WATER CYCLE



Q#1 The diagrams below show the processes of water cycle.



a) Arrange the processes of the water cycle in the correct sequence. (use letters)

b) Name the process that happens at B.

\_\_\_\_\_

c) State the change in the state of matter in A.

 → 

Q#2 Read the descriptions given and choose condensation or evaporation.

1. You have a very hot shower and the bathroom mirror is covered with tiny droplets of water.

condensation/ evaporation

2. You put wet clothes near a heater.

condensation/ evaporation

3. You put a glass in the freezer.

condensation/ evaporation

Q#3 Label the following figure.

Precipitation

Evaporation

Collection

Condensation

