



HOW MANY ?



1 2 3 4 5




1 2 3 4 5



1 2 3 4 5




1 2 3 4 5



1 2 3 4 5



1 2 3 4 5



1 2 3 4 5



1 2 3 4 5