

SEKOLAH KEBANGSAAN JELAPANG

SCIENCE YEAR 3




SCIENTIFIC SKILLS

SCIENCE PROCESS SKILLS – MAKING INFERENCES

Name : _____

Class : 3 Delima

A) Match the each diagram to the correct inference.



◀ The plant moves towards light.

◀ The plant does not get enough basic needs.

◀ The plant gets enough basic needs.

B) Rewrite the correct inference for each picture.

Fell from a tree

Ali ran the fastest

Slept while driving

There is a fire

1.



2.



3.



4.

