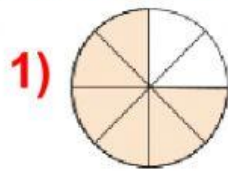


MCQ-TEST1
VII Maths- Fractions

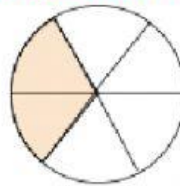
Name : _____ Class: _____

Write the suitable fractions for shaded and unshaded parts of the following figures.



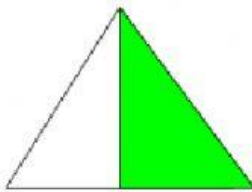
Shaded part = ---

2)



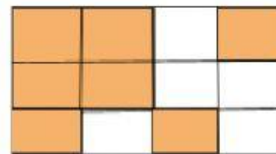
Shaded part = ----

3)



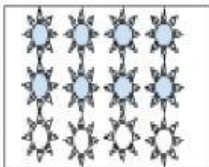
Shaded part = ---

4)



Shaded part = ---

5)



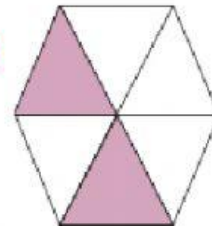
Shaded part = ---

6)



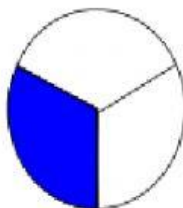
Shaded part = ---

7)



Shaded part = ---

8)



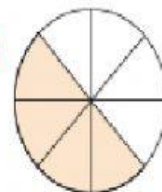
Shaded part = ---

9)



Shaded part = ---

10)



Shaded part = ---