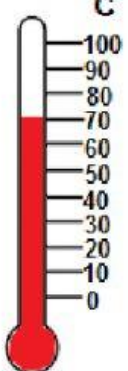

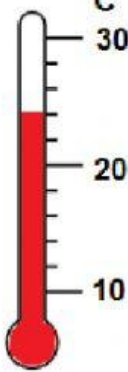




# LS 3 Science - Term 3 Measurement Topic 2: Heat and Light Energy Measuring Temperature

Instruction: For each of the thermometers write:

1. The highest temperature (that can be read on the thermometer)
2. The lowest temperature (that can be read on the thermometer)
3. The current temperature (that is shown on the thermometer)

 <p>°C</p> <p>Highest temperature =</p> <p>Lowest temperature =</p> <p>Current temperature =</p>	 <p>°C</p> <p>Highest temperature =</p> <p>Lowest temperature =</p> <p>Current temperature =</p>
 <p>°C</p> <p>Highest temperature =</p> <p>Lowest temperature =</p> <p>Current temperature =</p>	 <p>°C</p> <p>Highest temperature =</p> <p>Lowest temperature =</p> <p>Current temperature =</p>
 <p>°C</p> <p>Highest temperature =</p> <p>Lowest temperature =</p> <p>Current temperature =</p>	