

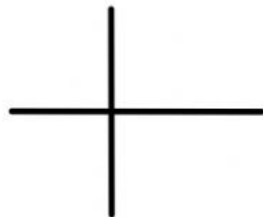



What is the relation between each pair of line? Match

Parallel lines



Perpendicular lines



Intersecting and not perpendicular lines

