





1.  Plus   $\boxed{1} + \boxed{1} = \boxed{2}$

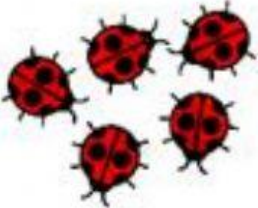

Write your name -

2.  Plus   $\boxed{\phantom{00}} + \boxed{\phantom{00}} = \boxed{\phantom{00}}$

3.  Plus   $\boxed{\phantom{00}} + \boxed{\phantom{00}} = \boxed{\phantom{00}}$

4.  Plus   $\boxed{\phantom{00}} + \boxed{\phantom{00}} = \boxed{\phantom{00}}$

5.  Plus   $\boxed{\phantom{00}} + \boxed{\phantom{00}} = \boxed{\phantom{00}}$

6.  Plus   $\boxed{\phantom{00}} + \boxed{\phantom{00}} = \boxed{\phantom{00}}$