

Name: \_\_\_\_\_ Roll No : \_\_\_\_\_ Class : 2 Section : \_\_\_\_\_

**Worksheet # 03**

**Topic : Ordinal numbers, Even and odd numbers, Fractions, 6 times table**

**Q.1** Select the 2<sup>nd</sup> , Sixth and 11<sup>th</sup> flower (left to right).

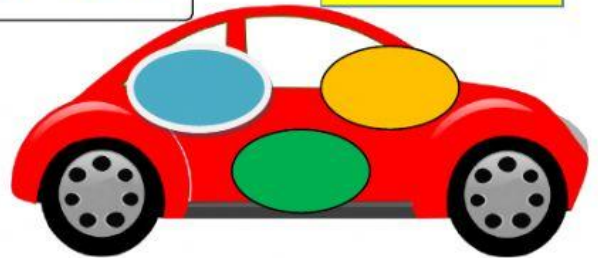
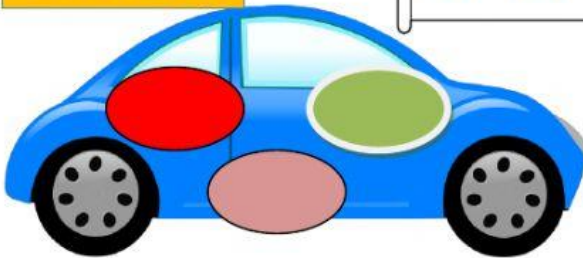


**Q.2** Pick the numbers and put them in their respective car.

**Even numbers**

15, 630, 5 042, 6 019, 7, 988

**Odd numbers**



**Q.3** Match with the correct option.

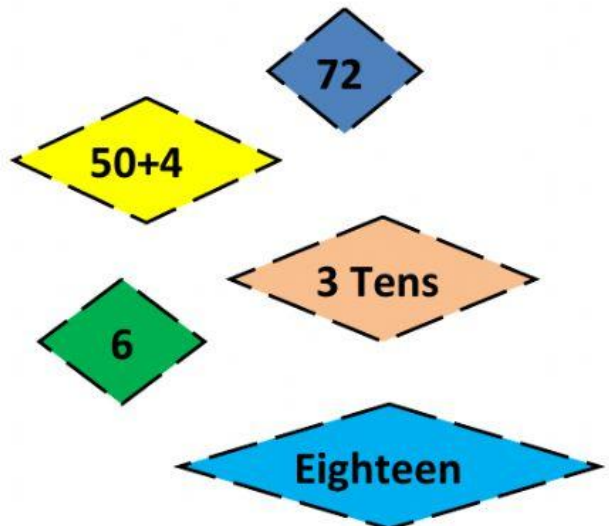
$5 \times 6$

$3 \times 6$

$12 \times 6$

$9 \times 6$

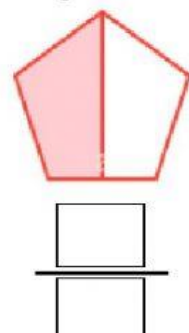
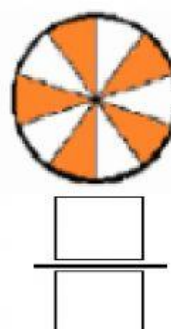
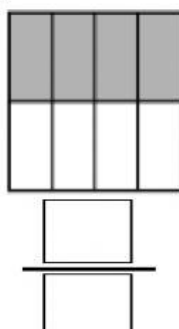
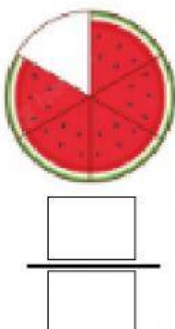
$1 \times 6$



**Q.4** Complete the table.

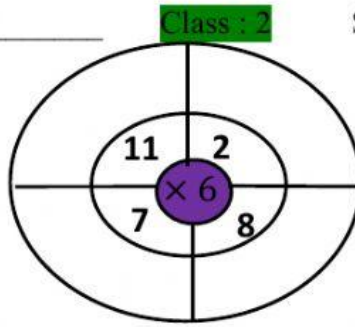
Cardinal number	Ordinal number in figures	Ordinal number in words
13		
	11 <sup>th</sup>	
		Eighth
Nineteen		

**Q.5** Look at the colored parts of each shape and write the fraction in figures.



Name: \_\_\_\_\_ Roll No : \_\_\_\_\_ Class : 2 Section : \_\_\_\_\_

Q.6 Complete the wheel.



Q.7 Look at the position of children and fill in the blanks.



Sara



Ali



Fiza



Hamza



Ayesha



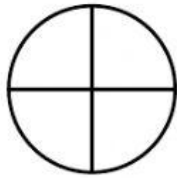
Hira



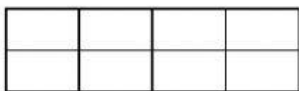

Ezzan

- \_\_\_\_\_ is at sixth position.
- Fiza is at \_\_\_\_\_ position.
- \_\_\_\_\_ is between Hamza and Hira.
- Ezaan is at \_\_\_\_\_ position.
- \_\_\_\_\_ is at 2<sup>nd</sup> position.

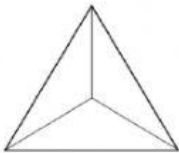
Q.8 Look at the equal parts of a shape and match with the name of equal parts .



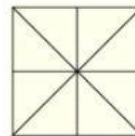
Thirds



Eighths



Quarters



Q.9 Write the odd numbers between 13 and 25.

13, \_\_\_\_\_, \_\_\_\_\_, \_\_\_\_\_, \_\_\_\_\_, \_\_\_\_\_, 25

Q.10 Tick the shapes which have equal parts.

