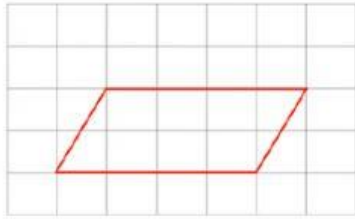


Area of Parallelogram

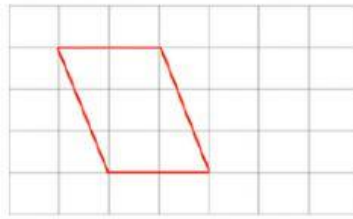
Question 1: The following parallelograms are drawn on centimeters-squared paper. Find the area of each.

(a)



Answer: _____ cm^2

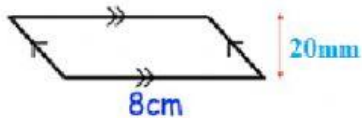
(b)



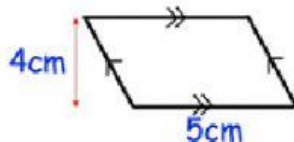
Answer: _____ cm^2

Question 2: Work out the area of each of the parallelograms below.

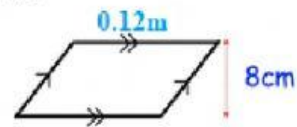
(a)



(b)



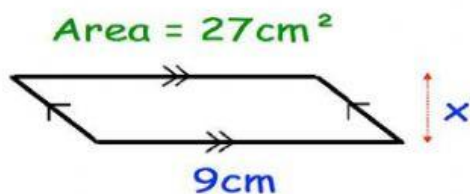
(c)



Answer: _____ cm^2 or _____ cm^2 Answer: _____ cm^2
 _____ mm^2

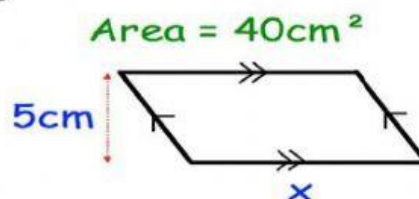
Question 3: The areas of each of the parallelograms has been given. Calculate the length of the missing sides.

(a)



Answer _____ cm

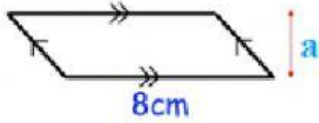
(b)



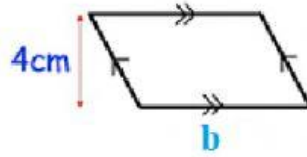
Answer: _____ cm

Question 4: The areas of all the parallelograms is 24cm^2 . Calculate the length of each missing sides.

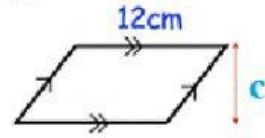
(a)



(b)



(c)



Answer: $a = \underline{\hspace{1cm}}$ cm

$b = \underline{\hspace{1cm}}$ cm

$c = \underline{\hspace{1cm}}$ cm