



The time is half past 3.  
When the long hand is on  
(6) we say half past.


What time is shown on these clocks?



Half past \_\_\_\_\_




Half past \_\_\_\_\_



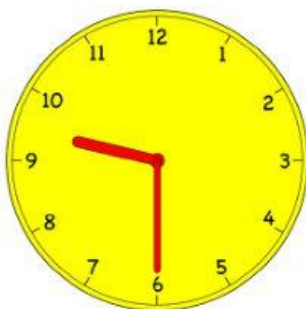
Half past \_\_\_\_\_



Half past \_\_\_\_\_



Half past \_\_\_\_\_



Half past \_\_\_\_\_