

## Forces and Motions Activity sheet

Write the word **push**, **pull** or **both** below each picture to show the force and motion.



\_\_\_\_\_




\_\_\_\_\_



\_\_\_\_\_



\_\_\_\_\_




\_\_\_\_\_




\_\_\_\_\_



\_\_\_\_\_



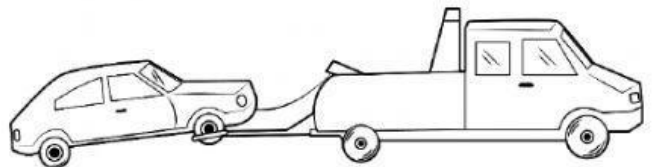
\_\_\_\_\_



\_\_\_\_\_



\_\_\_\_\_




\_\_\_\_\_




\_\_\_\_\_



\_\_\_\_\_



\_\_\_\_\_



\_\_\_\_\_

What is a force? \_\_\_\_\_

\_\_\_\_\_

What is Motion? \_\_\_\_\_

\_\_\_\_\_