

WORKSHEET -4

1. GOING TO SCHOOL





NAME : _____

SUB: EVS

CLASS : IV STD

DATE : _____

I. Match the description with the given pictures:

<p>1. Rani lives in a town of Puducherry.</p> <p>Her school is near her house.</p> <p>She can go to school by riding a</p>	
<p>2. Ravi lives in Kodaikanal. His school is situated on the other side of the hill from his house. He goes to school through a</p>	
<p>3. Rajesh and his friends live in a small town of Puducherry.</p> <p>They go to their school situated 8 km from their home, by taking a</p>	
<p>4. Adityan lives in Kerala.</p> <p>He lives on the bank of river. His school is located on the other side of the river. He cross the river by a</p>	

II. Write 'T' for True and 'F' for False statement:

1. A camel-cart is generally found in deserts. - _____
2. It is easy to walk on snow. - _____
3. Trains can easily move over a bamboo bridge. - _____
4. We can ride a jugad to reach school if it lies
across green fields. - _____
5. Bullock cart is used in village of northern hills. - _____
6. Paths are rocky in mountains. - _____