

Science for Grade 2

Check Progress Unit 4. Light and dark

Name _____

Class _____

A. Put the items below into the correct group.



Sun



Mirror



Spoon



Candle



Moon



Lamp



Flashlight



Diamond

Light sources	Not light sources

B. Choose the correct answer.

1. Look at the picture below. Which one is a natural light source?

a.



b.



c.



2. Which of these is a correct light source position?

a.



b.



c.



3. Which of these is a correct shadow?

a.



b.

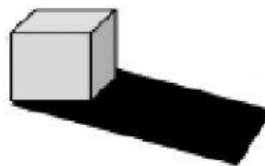


c.



4. Look at the picture.

To make a shadow, you need ...



a. a light source

b. an object

c. people

5. Which shadow looks like a deer?

a.




b.




c.




C. Match the word with the condition of each room.



a lot of light



some light



no light