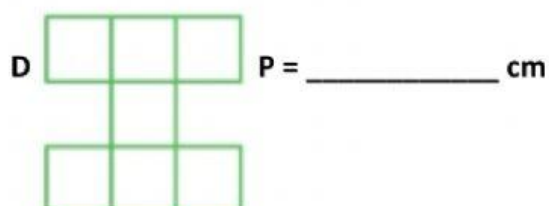
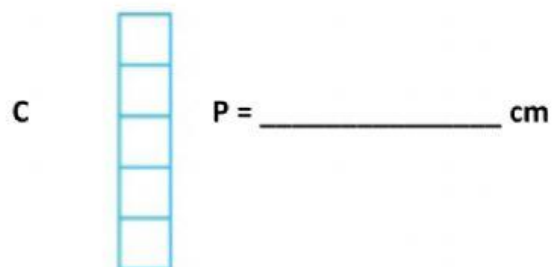
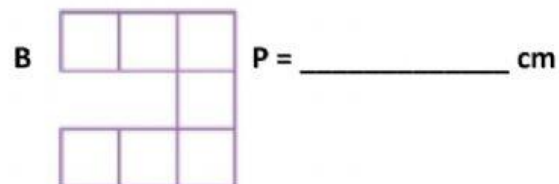
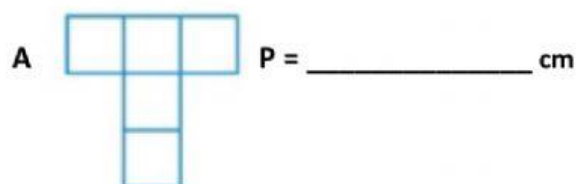


ALUNNO : \_\_\_\_\_

CALCOLA IL PERIMETRO DELLE SEGUENTI FIGURE E SCRIVI IN BASSO LE LETTERE CORRISPONDENTI AI POLIGONI AVENTI LO STESSO PERIMETRO, OSSIA ISOPERIMETRICI (RISPETTA L'ORDINE ALFABETICO)



SONO ISOPERIMETRICI I POLIGONI:

