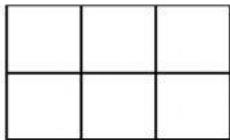


# Comparación de fracciones

Observa y colorea en cada figura la fracción indicada (de izquierda a derecha y de arriba abajo).

Luego aprende completando las frases escogiendo la palabra y el signo adecuado

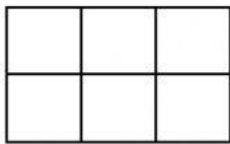


$$\frac{4}{6}$$

Las dos fracciones tienen igual

Es mayor la fracción que tiene

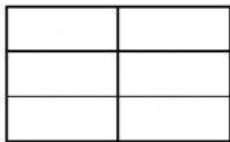

numerador



$$\frac{2}{6}$$

$$\frac{4}{6}$$

$$\frac{2}{6}$$




$$\frac{2}{6}$$

Las dos fracciones tienen igual

Es mayor la fracción que tiene

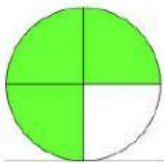

numerador



$$\frac{2}{3}$$

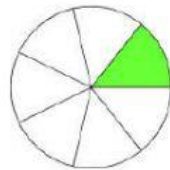

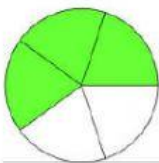
$$\frac{2}{6}$$

$$\frac{2}{3}$$



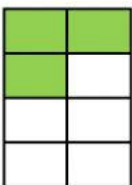

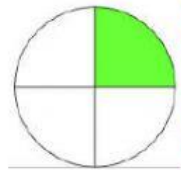
$$\frac{3}{4}$$

$$\frac{3}{5}$$




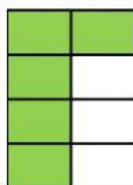
$$\frac{1}{7}$$

$$\frac{1}{4}$$



$$\frac{3}{8}$$

$$\frac{5}{8}$$



$$\frac{6}{10}$$

$$\frac{4}{10}$$

