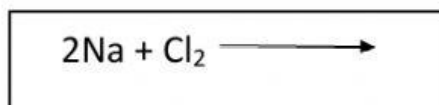
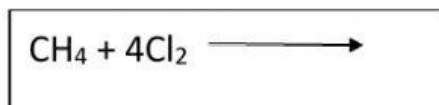
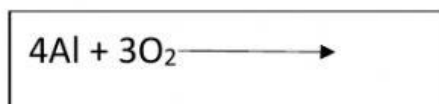
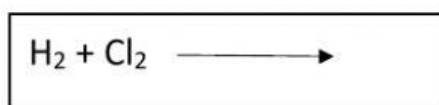


Name: \_\_\_\_\_ Grade: 5\_\_

### Representing Chemical Changes: Chemical Equations

Match the reactants to the products.

#### Reactants



#### Products

