

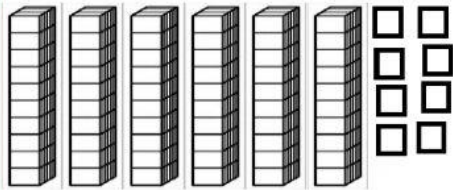
Mathematics

Sixty Family Numbers




A. Type the sixty family numbers

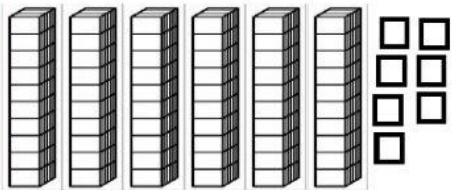
B. How many tens and ones?



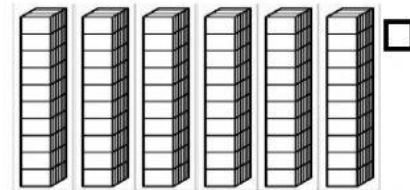
_____ tens _____ ones = _____



_____ tens _____ ones = _____



_____ tens _____ ones = _____



_____ tens _____ ones = _____

C. Fill in the missing number (before, after, between)

D. _____, 61

E. _____, 69

F. _____, 65

G. 68, _____

H. 60, _____

I. 67, _____

J. 64, _____, 66

K. 67, _____, 69

L. 65, _____, 67

Click the greatest (biggest) number in each set.

(M) 68

61

(N) 60

65

(O) 67

66

P. Which number doesn't belong?

69

60

68

61

57

63