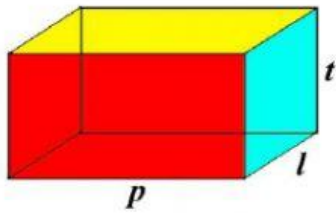


## Menghitung Volume Bangun Ruang

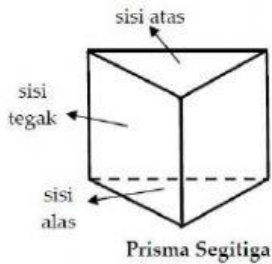
Nama:

Kelas:

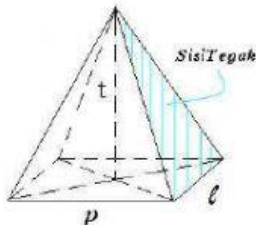
Menjodohkan! Tarik garis pada bangun ruang sesuai dengan rumus menghitung volume bangun ruang yang benar dan sesuai!



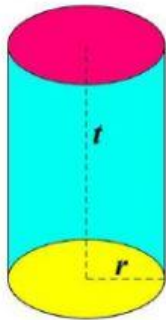
$$V = \pi \times r^2 \times t$$



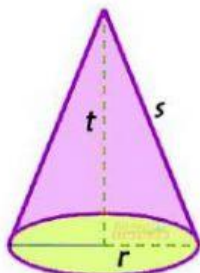
$$V = \text{Luas alas} \times t$$



$$V = \frac{1}{3} \pi \times r^2 \times t$$



$$V = p \times l \times t$$



$$V = \frac{1}{3} \times L \text{ alas} \times t$$