

Name: _____

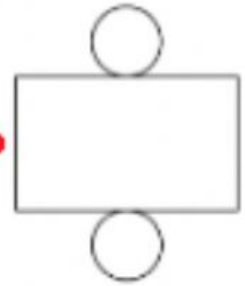
Date: _____

Nets of Solid Shapes

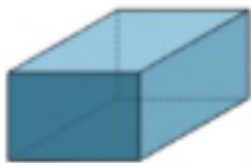
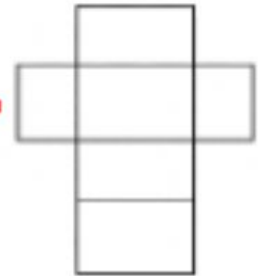
Match each net to its solid shape and name.



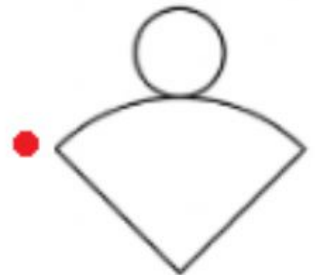
cuboid



cone



cube



cylinder

