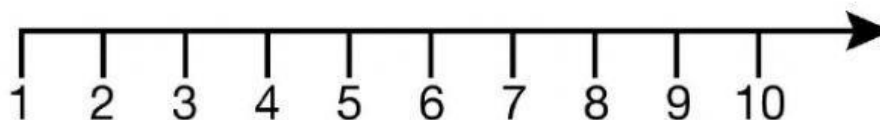


Name _____ Date _____

Range, Mode, Median, and Mean

1. 5, 3, 7, 3, 5



_____ - _____ = _____
highest lowest range

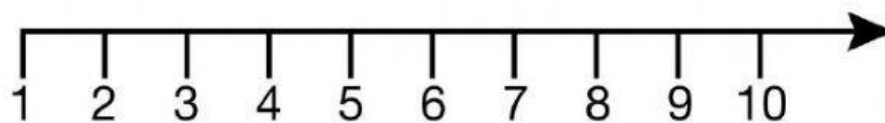
Mode: _____

Median: _____, _____, _____, _____, _____

Mean: _____ + _____ + _____ + _____ + _____ = _____

_____ ÷ _____ = _____

2. 5, 8, 5, 6, 8



_____ - _____ = _____
highest lowest range

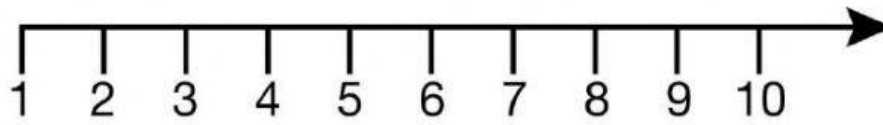
Mode: _____

Median: _____, _____, _____, _____, _____

Mean: _____ + _____ + _____ + _____ + _____ = _____

_____ ÷ _____ = _____

3. 2, 5, 3, 3, 3



_____ - _____ = _____
highest lowest range

Mode: _____

Median: _____, _____, _____, _____, _____

Mean: _____ + _____ + _____ + _____ + _____ = _____

_____ ÷ _____ = _____