













Name

Date



ADDITION & SUBTRACTION PROBLEMS TO 150

SHEET 3 ANSWERS

		WORKING OUT
1)	<p>On Monday, I pick 45 .</p> <p>On Tuesday, I pick 58 .</p> <p>On Wednesday, I pick 33 .</p> <p>How many  did I pick in all? <input type="text"/></p>	$45 + 58 + 33 = \boxed{}$
2)	<p>A shop has 128 .</p> <p>It sells 73 .</p> <p>How many are left? <input type="text"/></p>	$128 - 73 = \boxed{}$
3)	<p>There are 132 .</p> <p>47  go away.</p> <p>What is 132 minus 47? <input type="text"/></p>	$132 - 47 = \boxed{}$
4)	<p>Jill has 79 .</p> <p>Jen has 68 .</p> <p>How many altogether? <input type="text"/></p>	$79 + 68 = \boxed{}$
5)	<p>Captain finds 130 .</p> <p>Newton finds 77 .</p> <p>What is the difference? <input type="text"/></p>	$130 - 77 = \boxed{}$