

Opposites



Name: _____



Directions: Find the opposite of the picture.



5 . What is the opposite of



6 . What is the opposite of



7

7 . What is the opposite of



8

8 . What is the opposite of



Opposites


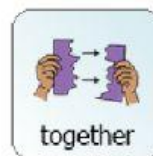
Name:



Directions: Find the opposite of the picture.




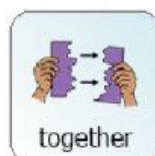
1 . What is the opposite of



2 . What is the opposite of



3 . What is the opposite of



4 . What is the opposite of

