


For each picture decide: Type of machine being used: lever wheel & axle pulley inclined plane wedge screw compound compound
 Type of power being used: muscle and machine animal and machine outside power and machine
 muscle and machine outside power and machine

History of Machines


1. Machine:
Power:




2. Machine:
Power:



3. Machine:
Power:



5. Machine:
Power:



Steam Engine - James Watt, 1776

4. Machine:
Power:

2. What invention in 1776 helped start the industrial revolution?

3. Drag and drop from Column B to Column A

Column A

- _____ a. used to lift objects to heights
- _____ b. used in prehistoric times
- _____ c. source of power for textile mills
- _____ d. found in most land vehicles
- _____ e. modern machine

Column B

- steam
- wheel and axle
- pulley
- computer
- lever