





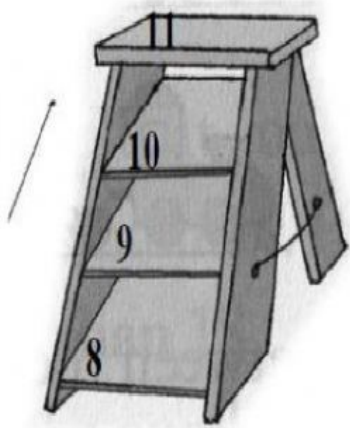




Counting in tens, comparing numbers

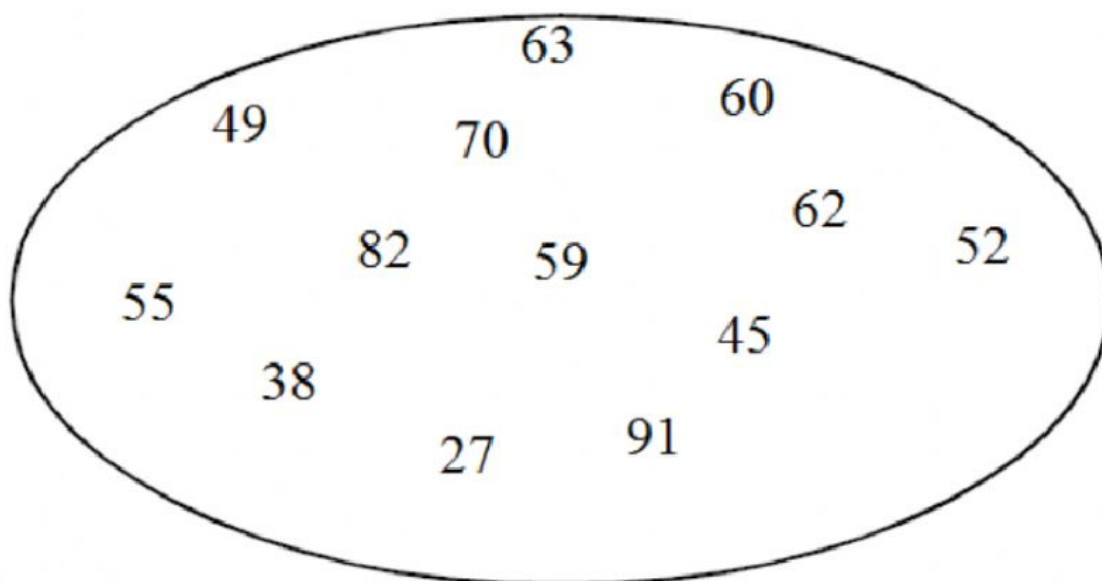
A. Count and write the numbers. Then write $>$, $<$ in the blank box in the middle.

	<div style="border: 1px solid black; padding: 5px; display: inline-block;">8</div>	<div style="border: 1px solid black; padding: 5px; display: inline-block;">$>$</div>	<div style="border: 1px solid black; padding: 5px; display: inline-block;">6</div>	
	<div style="border: 1px solid black; width: 40px; height: 40px; display: flex; align-items: center; justify-content: center;"></div>	<div style="border: 1px solid black; width: 40px; height: 40px; display: flex; align-items: center; justify-content: center;"></div>	<div style="border: 1px solid black; width: 40px; height: 40px; display: flex; align-items: center; justify-content: center;"></div>	
	<div style="border: 1px solid black; width: 40px; height: 40px; display: flex; align-items: center; justify-content: center;"></div>	<div style="border: 1px solid black; width: 40px; height: 40px; display: flex; align-items: center; justify-content: center;"></div>	<div style="border: 1px solid black; width: 40px; height: 40px; display: flex; align-items: center; justify-content: center;"></div>	

B. Write the given numbers from smallest to biggest.

		
8 to 11	13 to 16	4 to 7

C. Select the numbers greater than 52.



D. Count on in tens.

a. 47, 57, _____, _____, _____, _____.

b. 39, 49, 59, _____, _____, _____, _____.

E. Count back in tens.

a. 90, 80, _____, _____, _____, _____.

b. 75, 65, _____, _____, _____, _____.

F. Complete the sentence to make it true.

a. $17 > \underline{\hspace{2cm}}$ b. $38 < \underline{\hspace{2cm}}$ c. $90 > \underline{\hspace{2cm}}$ d. $69 < \underline{\hspace{2cm}}$