

1. Write the sums. Circle the combination doubles.

$$\begin{array}{r} 4 \\ + 1 \\ \hline \end{array}$$

$$\begin{array}{r} 3 \\ + 2 \\ \hline \end{array}$$

$$\begin{array}{r} 1 \\ + 1 \\ \hline \end{array}$$

$$\begin{array}{r} 4 \\ + 0 \\ \hline \end{array}$$

$$\begin{array}{r} 2 \\ + 2 \\ \hline \end{array}$$

$$\begin{array}{r} 2 \\ + 4 \\ \hline \end{array}$$

$$\begin{array}{r} 3 \\ + 3 \\ \hline \end{array}$$

2. Write the numbers.

| hundreds | tens | ones |
|----------|------|------|
| | ★ | ★ |

| hundreds | tens | ones |
|----------|-------|------|
| ★ | ★ ★ ★ | ★ ★ |

3. Draw stars to show the numbers.

| hundreds | tens | ones |
|----------|------|------|
| | | |

43

| hundreds | tens | ones |
|----------|------|------|
| | | |

125

4. Circle the number that is greater.

63

37

46

94

83

18

52

25

5. Count by ones.

| | | | | | | | | | |
|--|--|--|--|----|--|--|--|--|--|
| | | | | 59 | | | | | |
|--|--|--|--|----|--|--|--|--|--|



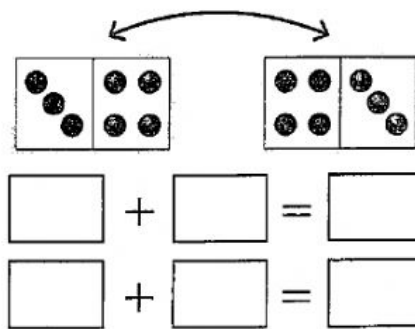
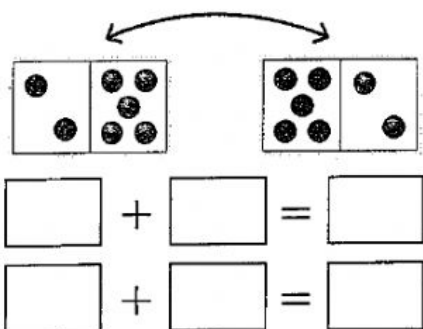
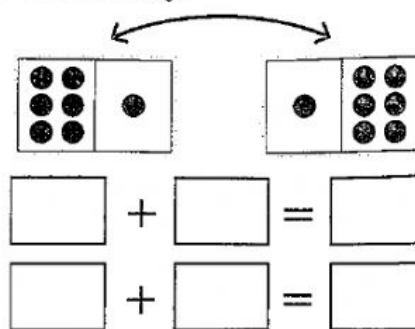
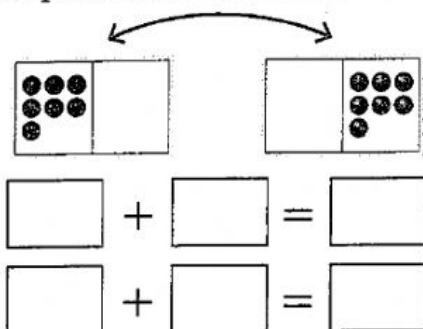
6. How many cents?


 ¢

7. How many dollars?


\$.00

1. Complete the addition sentences of the Seven Family.



2. Write the times.



:



:



:



:

3. Write the sums as your teacher shows you the flashcard.

A.

B.

C.

D.

E.

F.

4. Circle the fourth duckling from the left. Draw a box around the second duckling from the right.

