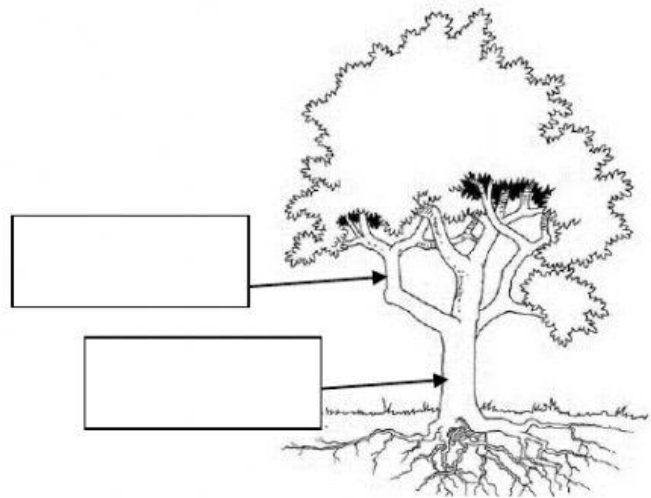
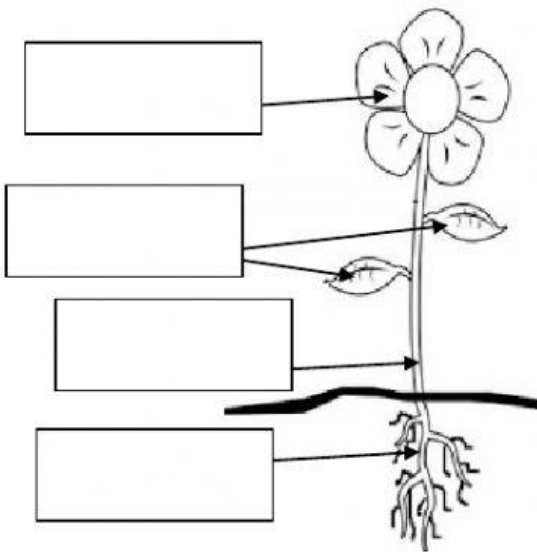



PLANTS


1. Label the pictures. Drag the words in the correct box.


ROOTS	FLOWER	BRANCH	LEAVES	TRUNK	STEM
-------	--------	--------	--------	-------	------





2. Which part of the plant do we eat? Look at the pictures and click on the name of the plant part we eat.


	Flower
	Seed
	Fruit
	Stem
	Leaves
	Roots


	Flower
	Seed
	Fruit
	Stem
	Leaves
	Roots


	Flower
	Seed
	Fruit
	Stem
	Leaves
	Roots


	Flower
	Seed
	Fruit
	Stem
	Leaves
	Roots


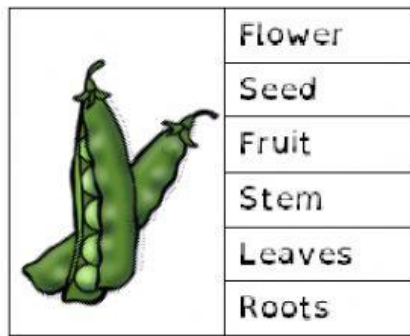
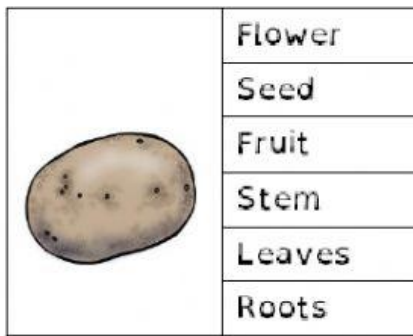
	Flower
	Seed
	Fruit
	Stem
	Leaves
	Roots

	Flower
	Seed
	Fruit
	Stem
	Leaves
	Roots

	Flower
	Seed
	Fruit
	Stem
	Leaves
	Roots

	Flower
	Seed
	Fruit
	Stem
	Leaves
	Roots

	Flower
	Seed
	Fruit
	Stem
	Leaves
	Roots



3. PARTS OF THE PLANT FUNCTIONS. Read and click on the name of the plant part that does the job.

_____ make food for the plant.			
Flowers	Stem	Leaves	Roots
_____ absorb water and nutrients from the soil.			
Flowers	Stem	Leaves	Roots
_____ make seeds.			
Flowers	Stem	Leaves	Roots
_____ hold the plant in the ground.			
Flowers	Stem	Leaves	Roots
_____ carries water and nutrients around the plant.			
Flowers	Stem	Leaves	Roots
_____ holds up the plant.			
Flowers	Stem	Leaves	Roots