


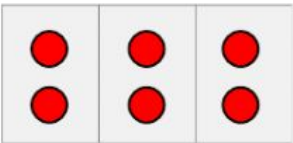


Name: \_\_\_\_\_

Class: \_\_\_\_\_

## 12. Find the Product of Multiplication

### A. Visual learning

 $3 \times 2 = ?$	
<p>We can use <b>model</b>.</p>  So $3 \times 2 = 6$	<p>Or we can use the <b>repeated addition</b>.</p> <p>3 times 2</p> $2 + 2 + 2 = 6$ So $3 \times 2 = 6$
<p>Each number in the multiplication has a name.</p> $\begin{array}{ccc} & 3 \times 2 = 6 & \\ \nearrow & & \uparrow \\ \text{factors} & & \text{product} \end{array}$	

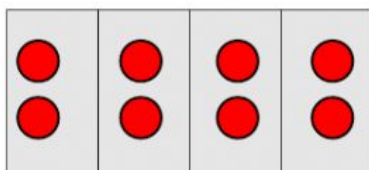
### B. Vocabulary

group: nhómrepeated addition: phép cộng lặpfactor: thừa sốproduct: tích

### C. Independent practice

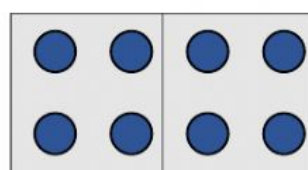
1. Choose the correct answer.  $4 \times 2 =$  \_\_\_\_\_

A.



$$4 \times 2 = 8$$

B.



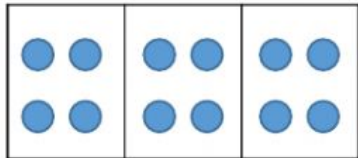
$$4 \times 2 = 8$$

Choose the model then find the product.

2.

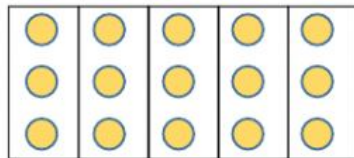


$$2 \times 7 = \underline{\hspace{2cm}}$$



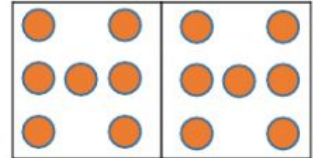
3.

$$3 \times 4 = \underline{\hspace{2cm}}$$



4.

$$5 \times 3 = \underline{\hspace{2cm}}$$



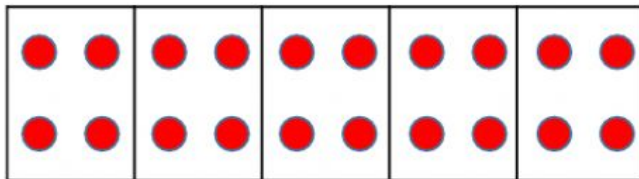
5. There are 4 boxes.

Each box has 5 cakes.

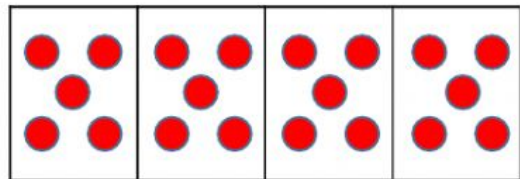
How many cakes are there in all?

a/ Choose the correct model.

A.



B.



b/ Write the numbers.

$$\underline{\hspace{2cm}} \times \underline{\hspace{2cm}} = \underline{\hspace{2cm}}$$

There are          cakes in all.