


Name

Date


Halves and Quarters.

Each of these shapes has been split into halves or quarters.

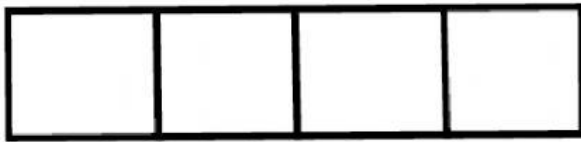
Choose the correct answer.




Halves
Quarters



Halves
Quarters




Halves
Quarters




Halves
Quarters



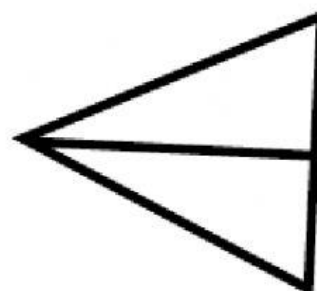
Halves
Quarters



Halves
Quarters



Halves
Quarters



Halves
Quarters