

Name

Date

Fractions of Shapes 3.

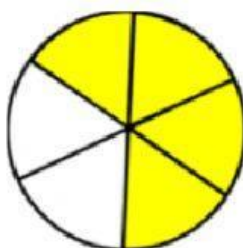
Draw a line to match each of the shaded shapes to its fraction and to its word form:

$$\frac{4}{5}$$



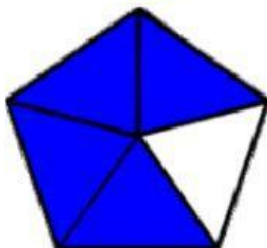
six eighths

$$\frac{6}{8}$$




four sixths

$$\frac{4}{6}$$



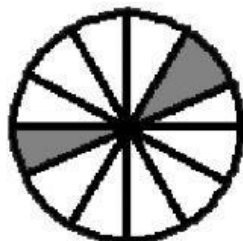
four fifths

$$1\frac{1}{10}$$



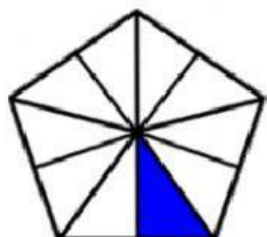
three eighths

$$\frac{3}{8}$$



two twelfths

$$\frac{2}{12}$$



one tenth