

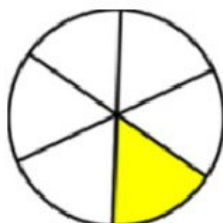
Name

Date

Fractions of Shapes 2.

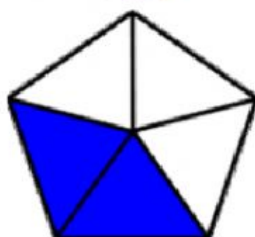
Draw a line to match each of the shaded shapes to its fraction and to its word form:

$\frac{3}{4}$



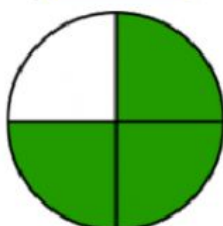
two fifths

$\frac{2}{5}$



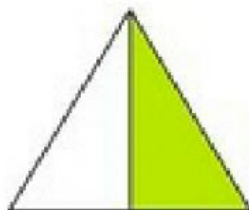
three quarters

$\frac{1}{6}$



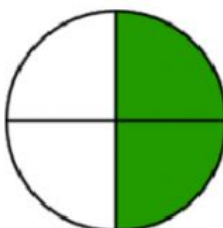
one sixth

$\frac{4}{8}$



four eighths

$\frac{2}{4}$



one half

$\frac{1}{2}$



two quarters