
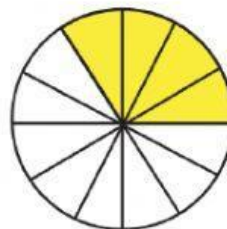

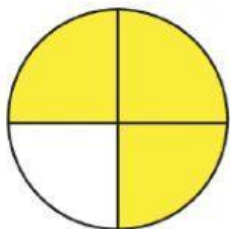
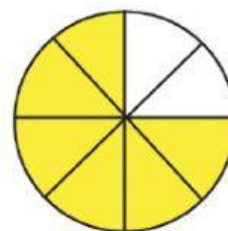

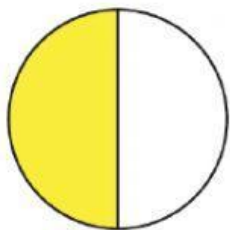
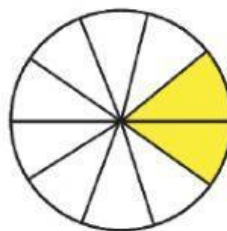

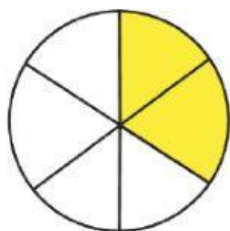
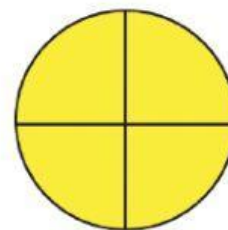

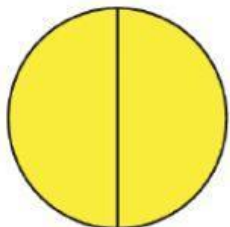
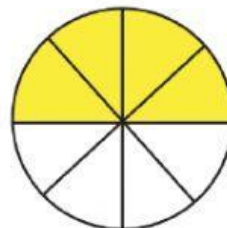

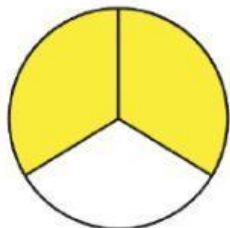
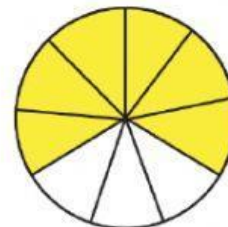


Name

Date

Equivalent Fractions 1.

Drag each of circles on the right and drop it next to the circle on the left that is equivalent and then drag and drop the fraction of each of the circles that is shaded.

 $\frac{3}{4}$ $\frac{2}{3}$  $\frac{1}{2}$ $\frac{6}{8}$  $\frac{4}{12}$ $\frac{1}{5}$  $\frac{2}{10}$ $\frac{4}{4}$  $\frac{4}{8}$ $\frac{2}{6}$  $\frac{6}{9}$ $\frac{2}{2}$