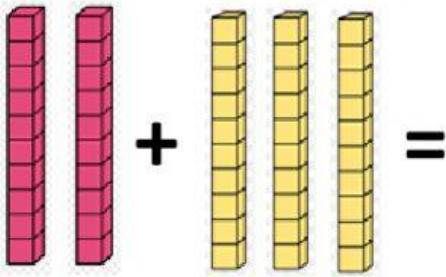
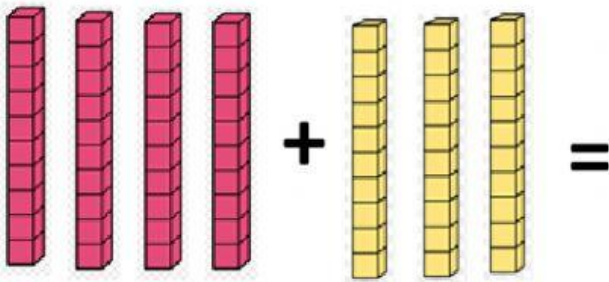


مدرسة الحرش التجريبية

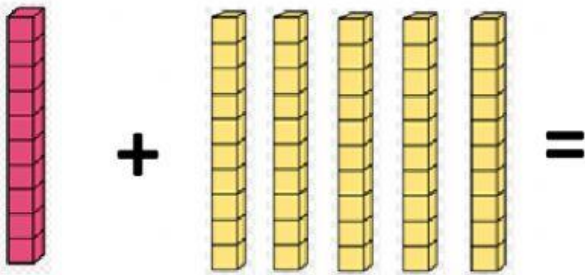
هيا نجمع العشرات الكاملة:



$$\square + \square = \square$$



$$\square + \square = \square$$



$$\square + \square = \square$$