





## Mathematics

### Money Problem Solving

Banana	Apple	orange	Plum
			
\$12.60 <sup>c</sup>	\$10.00 <sup>c</sup>	\$6.05 <sup>c</sup>	\$20.50 <sup>c</sup>

1. What is the most expensive fruit?
2. How much does two oranges cost?
3. How much does an apple and a plum cost?
4. Which fruit is the cheapest?
5. Tim buys three apples, he gave the vendor \$50, how much change should he receive?
6. How much money do I need to buy all the fruits?