





Name: _____ Grade: _____

Classification of Organisms

- Look at the pictures and select which groups they belong to. **(select all that apply)**

Organism	Classification
 <p>Roanoke Logperch – eats tiny organisms.</p>	<p>Producer Omnivore</p> <p>Consumer Herbivore</p> <p>Autotroph Carnivore</p> <p>Heterotroph</p>
 <p>American Black Bear – eats grasses, roots, berries, insects, fish, other mammals.</p>	<p>Producer Omnivore</p> <p>Consumer Herbivore</p> <p>Autotroph Carnivore</p> <p>Heterotroph</p>
 <p>Common Mudpuppy – eats small fish, fish eggs, salamanders, small turtles, and other mudpuppies</p>	<p>Producer Omnivore</p> <p>Consumer Herbivore</p> <p>Autotroph Carnivore</p> <p>Heterotroph</p>
 <p>Flowering Dogwood Tree- does photosynthesis to make food.</p>	<p>Producer Omnivore</p> <p>Consumer Herbivore</p> <p>Autotroph Carnivore</p> <p>Heterotroph</p>