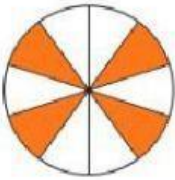



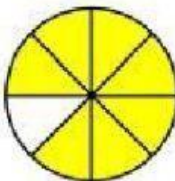
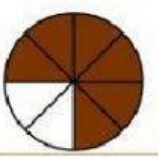

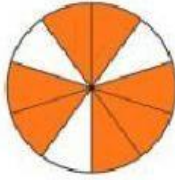
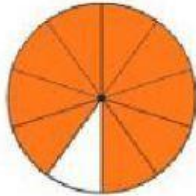



Scrivi per ciascuna immagine la frazione relativa alla parte colorata e di fianco la frazione complementare.

	PARTE COLORATA	FRAZIONE COMPLEMENTARE		PARTE COLORATA	FRAZIONE COMPLEMENTARE
	$\frac{4}{8}$	$\frac{4}{8}$		$\frac{1}{2}$	$\frac{1}{2}$
	$\frac{3}{4}$	$\frac{1}{4}$		$\frac{5}{6}$	$\frac{1}{6}$
	$\frac{7}{8}$	$\frac{1}{8}$		$\frac{7}{8}$	$\frac{1}{8}$
	$\frac{5}{6}$	$\frac{1}{6}$		$\frac{6}{8}$	$\frac{2}{8}$
	$\frac{7}{8}$	$\frac{1}{8}$		$\frac{4}{6}$	$\frac{2}{6}$