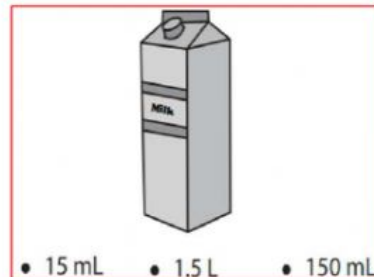
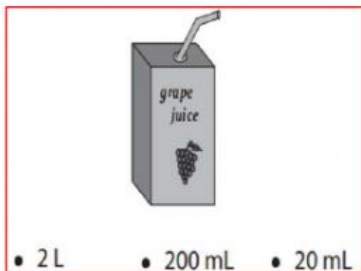




Name:

Estimate the capacity of this can?



Estimate the capacity of each object.



Sara bought  500 ml of mustard oil and  250 ml of coconut oil.

What is the total quantity of oil she bought?

Choose the correct choice that best estimates the capacity of each object.



- ☐ Less than 75 mL
☐ More than 75 mL



- ☐ Less than 500 mL
☐ More than 500 mL

There are 625ml juice in a jug. I drank some from it, Now the there is 310ml left in the jar. How much juice did I drink?