


Draw a line from the picture to its fraction.




$$\frac{2}{4}$$



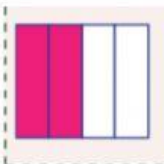
$$\frac{1}{3}$$



$$\frac{1}{4}$$



$$\frac{2}{3}$$



$$\frac{1}{2}$$