



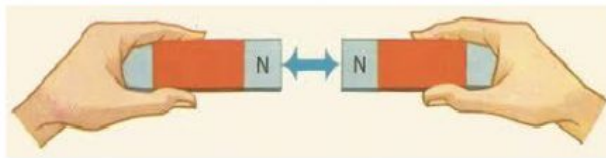
INTERNATIONAL CHRISTIAN ACADEMY SANTA RITA
SCIENCE EXAM 20%
5TH GRADE
II PARCIAL 2020-2021

TRUE OR FALSE 6%

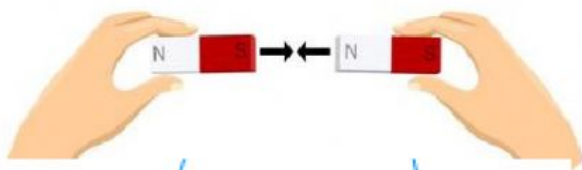
Write **T** if the statement is true, and **F** if the statement is false.

1. Magnetism is a pulling force contained in certain metals such as plastic ____.
2. One thing young animal must learn in order to survive is to take a dust bath ____.
3. Magnetism help some animals find their way (navigate, guide them) ____.
4. Warm- blooded is when the body temperature of the animal is the same when it's cold and hot outside. ____
5. All mammals are invertebrates. ____
6. Two reasons animals migrate is because they search for food and give birth. ____


On the line write whether the magnets will **repel** or **attract**. 3%



1. _____




2. _____



3. _____

Write whether the magnet is **nature** or **artificial** **2%**



FILL IN THE BLANKS **5%**

1. If I have a north pole and south pole facing each other, they will _____.
2. If I have a south pole with another south pole, they will _____.
3. Are the light that appears in the sky, when sun releases energy, _____.
4. The underground tunnel that prairie dogs make is called a _____.
5. Animals that are four-footed (4 legs) are called _____.

Write the name of the animal home. **4%**

1. Fox lives here: _____



1. Owls, squirrels lives here: _____

