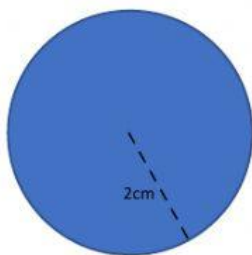


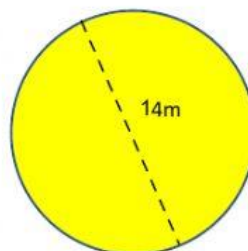
Area and Circumference of Circles

Round each answer to the nearest tenth.



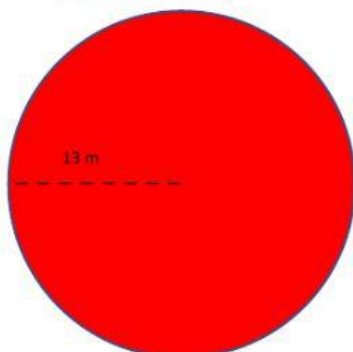
Circumference: _____ cm

Area: _____ cm^2



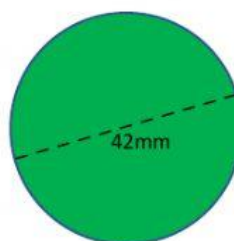
Circumference: _____ m

Area: _____ m^2



Circumference: _____ m

Area: _____ m^2



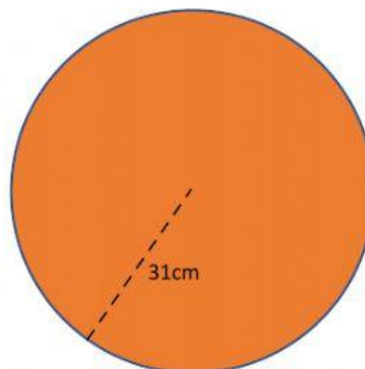
Circumference: _____ mm

Area: _____ mm^2



Circumference: _____ mm

Area: _____ mm^2



Circumference: _____ cm

Area: _____ cm^2