




Jack has these bulbs.

	Daffodils 49
	Tulips 63
	Crocuses 98

Equal numbers of each bulb are put into 4 tubs.

How many of each bulb will be in each tub?

Daffodils Tulips Crocuses

How many of each bulb will be left over?

Daffodils Tulips Crocuses

How many tubs could Jack use so that there are no bulbs left over?